

Maths Mastery Challenge Cards



Maths Mastery - Money

1. How many different ways can you make the total of £2.95?

You can use the same value coin more than once.

What is the least amount of coins you could use?



Maths Mastery - Money

2. At a market stall by the seaside, Hannah can buy the following items:

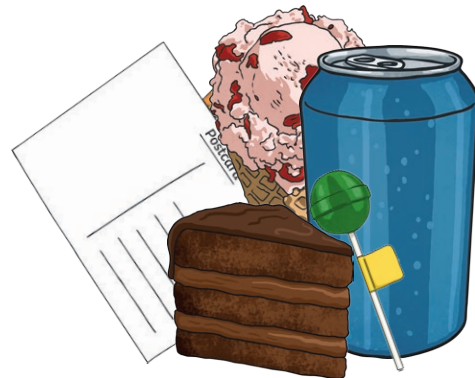
postcard 25p

lolly 35p

ice cream 75p

cake £1.20

cola 55p



Hannah has £2. She buys three items and has less than £1 in change. Which three items could she have bought?

Maths Mastery - Money

3. Maurice the magpie has been stealing again!

He has stolen 3 silver coins.

What different totals could the coins make?



Maths Mastery - Money

4. Find all the different amounts you can make choosing any 3 of these coins:



Maths Mastery - Money

5. Freddie has these coins:

Which items can Freddie pay for exactly without needing change?




Maths Mastery - Money

6. Ben bought a balloon.

He gave the shopkeeper six coins to pay for it.

What could Ben have paid for the balloon?

Look at your answers. Which ones are reasonable amounts to pay for a balloon?



Maths Mastery - Money

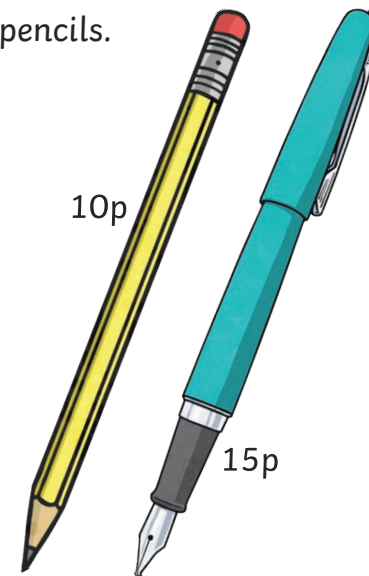
7. Imrik went to buy some pens and pencils.

He had £2.50.

He bought 4 times as many pens as pencils.

He was given 40p change.

How many pens and pencils did he buy?



Maths Mastery - Money

8. Pete the Pirate and his 2 brothers find some money.

They have a sister called Poppy.

If the brothers shared the money just amongst themselves, they would each get £20 more, than if they shared it equally with their sister too.

What was the sum of money that they had found?

